



As recommended by [gov.uk](https://www.gov.uk)

Home Learning Pack Year 1

Week 10
29/06/2020



Take a picture while you work through this booklet and tweet us [@ClassroomSecLtd](https://twitter.com/ClassroomSecLtd) using the hashtags [#CSKids](https://twitter.com/CSKids) and [#HomeLearningHero](https://twitter.com/HomeLearningHero) to be in with a chance of winning a month's subscription to [classroomsecrets.co.uk](https://www.classroomsecrets.co.uk).

Monday – Ordering Numbers

1. Which statement does not match the set of numbers below?

65

37

21

12

A. The numbers are ordered from smallest to largest.


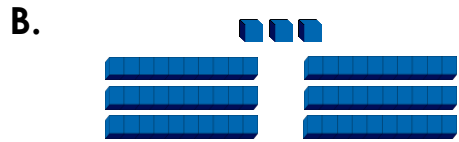
B. The fourth number is the smallest.

C. The numbers are ordered from largest to smallest.

D. The first number is largest.

2. Put the groups below in order from smallest to largest.

< < <



3. Frank is ordering the numbers below. Do you agree with Frank? Explain why.

81, 71, 63, 31, 12



The fourth number is smaller than the third number but bigger than the fifth number.

Monday – Question or not a Question?

1. Tick the sentences below that need a question mark.

A. Who stole the bone

C. What a fast bike you have

B. When I grow up, I will be rich

D. Where is the author

2. Underline the question in the texts below.

A. When we went to the park, we saw a kite. “How did your kite fly so high?” asked the girl.

B. “Where are the round shapes?” asked Maisie, when she was sorting the shapes.

3. Add a word from the word bank to complete the sentences below. Add the correct punctuation.

_____ wears a black cape _____

_____ dog was sleeping _____

When

My

Who

Tuesday – Recognising Coins

1. Count the coins and write how much money each person has.



Daisy



Tim



2. Joe dropped his wallet and lost some coins. Which coins did he lose?

Before



After



3. Peter and Sally both count their own money. Peter thinks they both have 2 gold coins so they must have the same amount on money.

Peter's money



Sally's money



Is Peter correct? Explain how you know.

Tuesday – Creative Writing Challenge

Read this poem starter.

Counting Poem



One red ladybird sitting on a leaf




Two wriggly worms crawling in the grass

Three baby tadpoles turning into frogs



Four pretty butterflies fluttering in the breeze

Five hungry caterpillars munching on some leaves



Six tiny spiders spinning lots of webs

Seven black beetles running in the mud







Finish the poem by counting up to 10 and using the word bank below. You can include any minibeasts in your poem.

Word Bank

slow

busy

rushing

flying

slithering

little

dashing

steady

buzzing

quiet

Wednesday – Recognising Notes

1. Ben thinks there are five £5 notes below. Is he correct?



2. Use $<$, $>$ or $=$ to compare the amounts below.










3. Sue has saved some money. Which notes could she have? Find three possibilities.



I have saved £45. I have two different types of notes.

Wednesday – Exclamation or Full Stop?

1. Tom and Liv are writing sentences.



Tom

Find your school bag quickly!



Liv

I went shopping with my mum yesterday!

Who is correct?

2. Punctuate the sentences below and sort them into the table.

Full Stop	Exclamation Mark

A. I enjoyed my drink

B. Stand outside

C. The mouse is small

3. Rewrite the sentences below so that each sentence uses a full stop.

A. Get off the railings!

B. Switch off the lights!

Thursday – Counting in Coins

1. Match each purse to the correct amount.

A.



12p

B.



18p

C.



15p

2. Use the word bank to complete the statements below.

is less than

is equal to

is more than



6p

11p




31p

3. Who has the most money? Explain how you know.



Billy

I have three 10p coins and a 2p coin.



Seb

I have four 5p coins and a 1p coin.

Thursday – The Alphabet

1. Look at the letter in the box.

h

Which letters below come before it in the alphabet? Circle them.

j

g

i

k

f

2. Look at the first letter of each word below. Which word would come last if they were put in alphabetical order? Underline it.

big

from

dog

egg

cat

3. The words on the list below are in alphabetical order:

she, under, very, what



The word 'that' should go after 'under' and before 'very'.



Ali

Is Ali correct? Explain how you know.

Friday – Reading Comprehension

Weather of the World

Read the information on the next page and answer the questions.

1. What day will it rain in London?

2. On how many days will it snow in London?

3. Which city will be the coldest?

4. Which city will be the hottest?

5. What date will it be on the Monday?

6. Will it get hotter or colder through the week in Lisbon?






Friday – Reading Comprehension

Weather of the World

WEATHER – LONDON, UK
9th January – 13th January

FORECAST SUMMARY






This week will start off cold and cloudy and we will see some snow by Wednesday. By the end of the week, it will be looking a little warmer just in time for the weekend!

Monday	Tuesday	Wednesday	Thursday	Friday
 4°C	 2°C	 1°C	 3°C	 5°C

WEATHER – LISBON, PORTUGAL
9th January – 13th January

FORECAST SUMMARY

This week will be warm and mild on Monday and Tuesday. By the end of the week, it will be cloudy and it will get colder so you might want to avoid the beach this weekend!

Monday	Tuesday	Wednesday	Thursday	Friday
 17°C	 16°C	 15°C	 14°C	 13°C