



As recommended by [gov.uk](https://www.gov.uk)

Home Learning Pack Year 2

Week 10
29/06/2020




Take a picture while you work through this booklet and tweet us [@ClassroomSecLtd](https://twitter.com/ClassroomSecLtd) using the hashtags [#CSKids](https://twitter.com/CSKids) and [#HomeLearningHero](https://twitter.com/HomeLearningHero) to be in with a chance of winning a month's subscription to [classroomsecrets.co.uk](https://www.classroomsecrets.co.uk).

Monday – Measure Mass in Grams

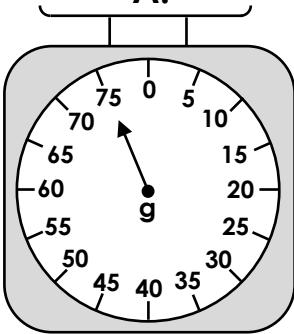
1. Match each item to the correct scale.

raspberry  6g

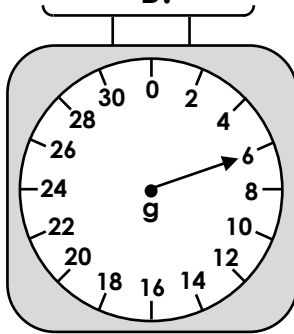
potato  150g

apple  75g

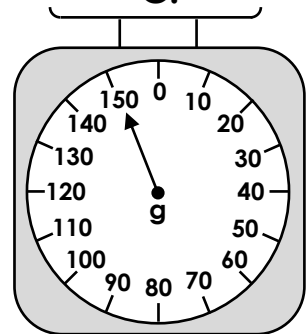
A.



B.

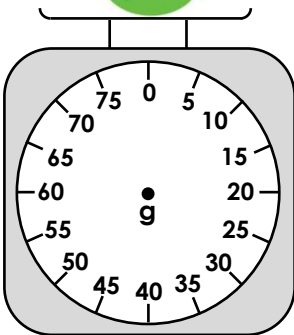


C.

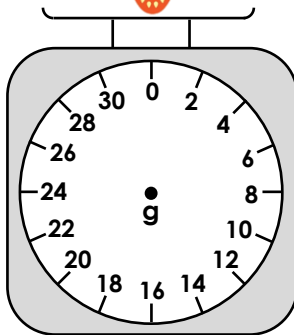


2. Draw the pointer in the correct position on the weighing scales.

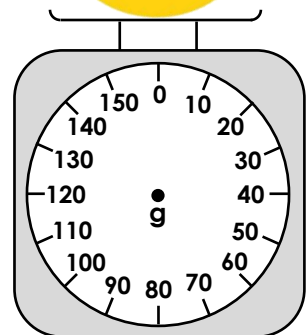
75g



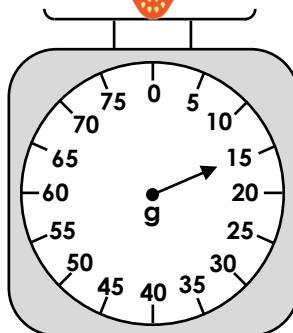
12g



140g



3. The pear weighs twice as much as the strawberry. Charlie has some 2g, 5g and 10g weights. Which weights could he use to balance the scales? Find 3 possible answers.



2g

5g

10g

Monday – Using Questions

1. Tick the questions that match the answers below.

Yes, I love it!

No, probably not.

A. Could you pass me the book?

A. Should you be eating sweets?

B. Are there many pages in the book?

B. Do you eat sweets?

C. Do you like the book?

C. Are you eating sweets?

2. Choose an opener from each word bank to complete the questions below.

_____ you want to go swimming?

_____ you pass a pencil to me please?

Can

Are

Do

May

Should

Could

3. Write the question that Omar has asked Jess.



Omar

Would...

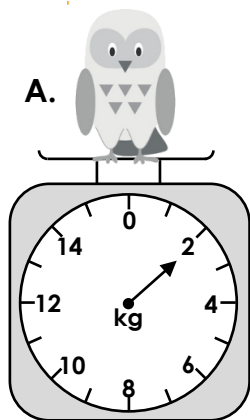
Yes, I would like to play outside please.



Jess

Tuesday – Measure Mass (kg)

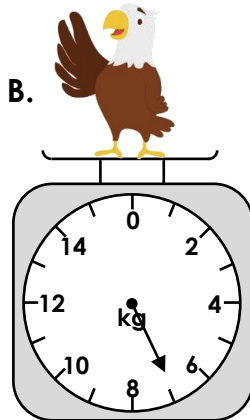
1. Draw a line from the animal to the correct mass.



2g

2kg

1kg

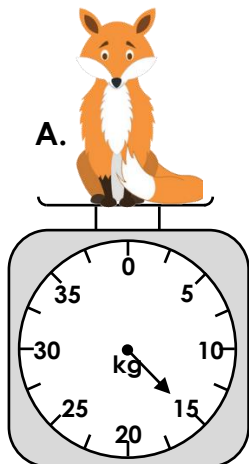


7g

7kg

8kg

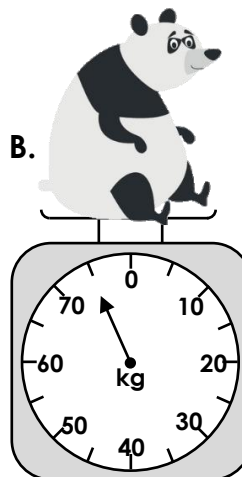
2. Put an 'X' in the correct the box to show whether each statement is correct or incorrect.



The fox weighs 15kg.

Correct

Incorrect


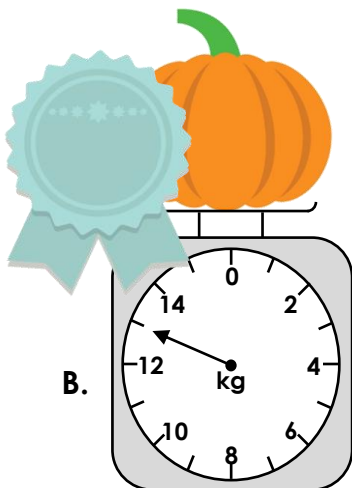



The panda weighs 65kg.

Correct

Incorrect

3. Three farmers are having a pumpkin growing competition. The heaviest pumpkin wins! Write on the ribbons which pumpkin came 1st, 2nd and 3rd.



Tuesday – Creative Writing Challenge

Read this poem starter.

Counting Poem



One spotted ladybird perched on a leaf



Two wriggly worms slithering through the soil

Three baby tadpoles changing into frogs



Four beautiful butterflies fluttering in the breeze



Five minute millipedes marching through the grass











Finish the poem by counting up to 10 and using the word bank below. You can include any minibeasts in your poem.

Word Bank

lazy

busy

rushing

hovering

sliding

tiny

darting

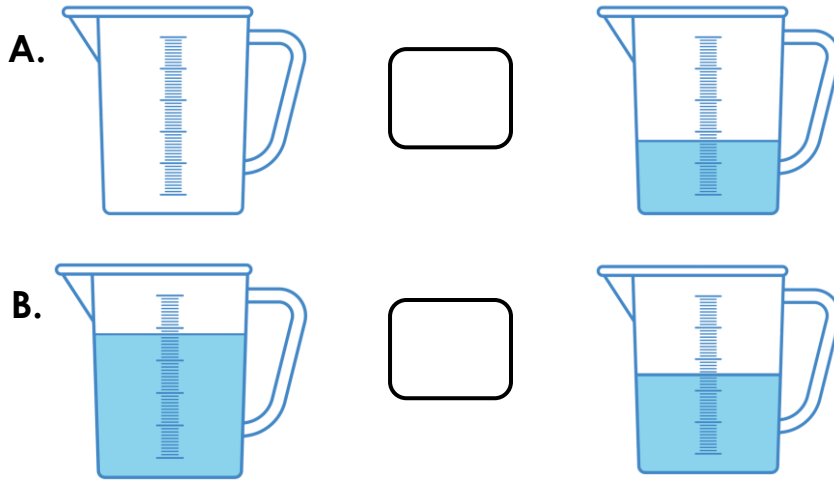
steady

buzzing

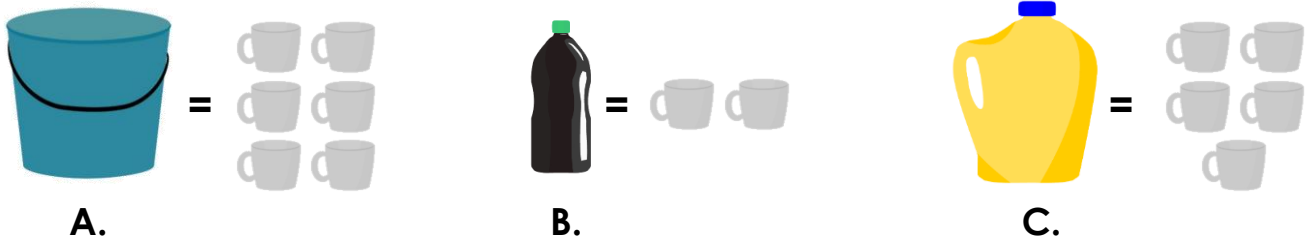
quiet

Wednesday – Compare Capacity

1. Use $>$, $<$ or $=$ to complete the statements below.




2. Order the capacity of the containers from smallest to greatest.



$<$ $<$

3. Sam and Aisha are comparing the total volume of their glasses.



Who is correct? Explain your answer.

Wednesday – Using Simple Contractions

1. Use the underlined words to make contractions and write them in the boxes.



The sun is not going to shine until this afternoon so



we cannot play outside until it is sunny.

2. Contract the word pairs below and use them to complete the sentences.

- A. _____ going to the park this afternoon.
- B. In the garden, _____ a slimy, green frog.
- C. Adam is upset because _____ never talked to him like that before.
- D. The teacher said we _____ rush our work before break time.

there is

should not

you have

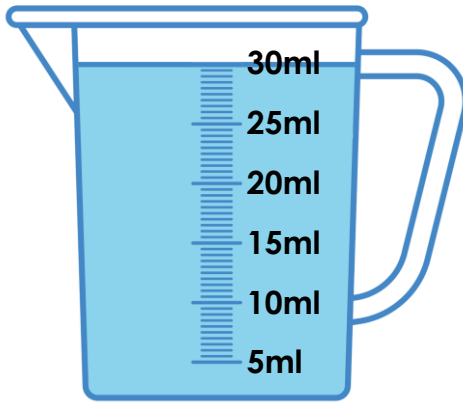
we are

3. Lily has written a story. Find and correct her mistakes.

It was pouring with rain, so we could'nt go outside
to play. I wasnt very happy about this, but there was
nothing I could do about it. I wanted to play a board
game instead, but Harry didnt like that idea.

Thursday – Millilitres

1. Look at the container below. 15ml is poured into a cup. Circle how much liquid would be left in the container.

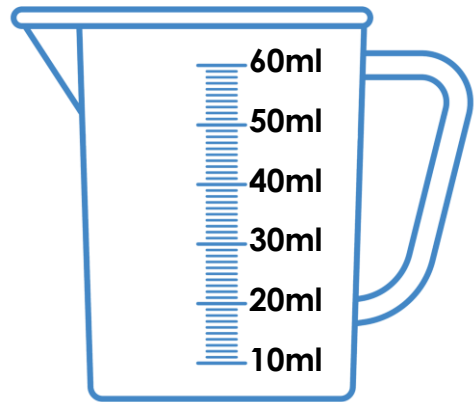


20ml


10ml

15ml

2. Each cup holds 25ml of water. Draw a line on the jug to show how much is needed to fill the cups.



3. Sam is making slime. He needs to mix 45ml of coloured water and 35ml of glue. Is Sam correct? Explain your answer.



I still need to add 10ml of glue.

Thursday – The Alphabet

1. Look at the letter in the box.



Which letters below come before it in the alphabet? Circle them.

p

e

y

w

d

2. Look at the first letter of each word below. Which word would come last if they were put in alphabetical order? Underline it.

fit

bumped

ill

would

upset

3. The words in the list below are in alphabetical order:

but, down, into, now, people, their

The word 'kick' should go after 'down' and before 'into'.



Evie

Is Evie correct? Explain how you know.

Friday – Reading Comprehension

Weather of the World

Read the information on the next page and answer the questions.

1. What is the date on Monday?

2. What will the temperature be when it rains in Sydney?

3. What sort of clothes would you wear on Monday and Tuesday in Sydney?

4. What sort of clothes would you wear for the weather in Nuuk, Greenland?

5. Which city has the most changes in the type of weather during the week?

6. What is a 'barbie'?

7. What season do you think it is in Sydney, Australia?

8. What does 'predict' mean?

Friday – Reading Comprehension






Weather of the World

WEATHER – SYDNEY, AUSTRALIA

9th January – 13th January

FORECAST SUMMARY

This week will be very warm. It will be sunny and dry most days but we do expect some rain towards the end of the week. Have your barbies on Monday and Tuesday while the weather is at its best!






Monday	Tuesday	Wednesday	Thursday	Friday
				
30°C	28°C	24°C	23°C	21°C

WEATHER – NUUK, GREENLAND

9th January – 13th January

FORECAST SUMMARY

This week will be very cold but it's a little warmer than last week! By Wednesday, we expect to see heavy snow. We predict that this will continue into next week so wrap up warm when you're out and about.

Monday	Tuesday	Wednesday	Thursday	Friday
				
-7°C	-5°C	-3°C	0°C	-2°C